

COS 226	Algorithms and Data Structures	Spring 2008
Final		

This test has 12 questions worth a total of 100 points. You have 180 minutes. The exam is closed book, except that you are allowed to use a one page cheatsheet (8.5-by-11, in your own handwriting). No calculators or other electronic devices are permitted. Give your answers and show your work in the space provided. **Write out and sign the Honor Code pledge before turning in the test.**

“I pledge my honor that I have not violated the Honor Code during this examination.”

Problem	Score
1	
2	
3	
4	
5	
6	
Sub 1	

Problem	Score
7	
8	
9	
10	
11	
12	
Sub 2	

Total	
-------	--

Name:

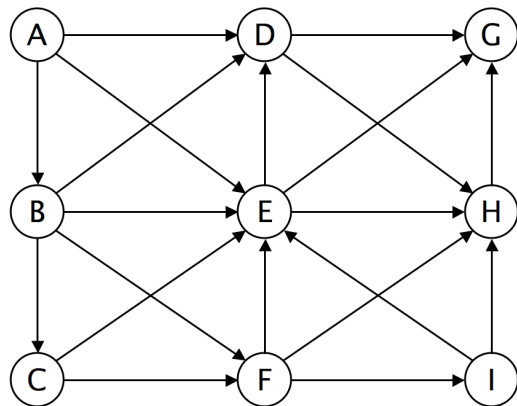
Login ID:

Precept:

- P01 12:30 Moses
- P01A 12:30 Szymon
- P02 1:30 Szymon
- P02A 1:30 Moses
- P03 3:30 Nadia

1. Graph search. (10 points)

Consider the following directed graph.



- (a) Run *depth-first search*, starting at vertex A. Assume the adjacency lists are in lexicographic order, e.g., when exploring vertex E, consider E-D before E-G or E-H. Complete the list of vertices in *preorder* (the order they are first discovered by DFS).

A B C --- --- --- --- --- ---

- (b) Run *breadth-first search*, starting at vertex A. Assume the adjacency lists are in lexicographic order. Complete the list of vertices in the order in which they are enqueued.

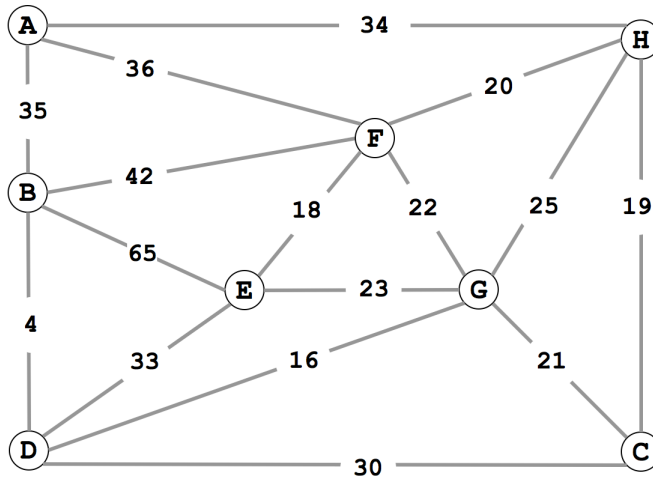
A B D E --- --- --- --- ---

- (c) Identify one situation where you would need to use BFS instead of DFS.

- (d) Identify one situation where you would need to use DFS instead of BFS.

2. Minimum spanning tree. (8 points)

Consider the following weighted graph.



- (a) Complete the list of edges in the MST in the order that *Kruskal's algorithm* includes them. For reference, the edge weights in ascending order are:

4 16 18 19 20 21 22 23 25 30 33 34 35 36 42 65

B-D ---- ---- ---- ---- ---- ----

- (b) Complete the list of edges in the MST in the order that *Prim's algorithm* includes them. Start Prim's algorithm from vertex A.

A-H ---- ---- ---- ---- ---- ----

3. Minimum spanning tree. (8 points)

Suppose you know the MST of a weighted graph G . Now, a new edge $v-w$ of weight c is inserted into G to form a weighted graph G' . Design an $O(V)$ time algorithm to determine if the MST in G is also an MST in G' . You may assume all edge weights are distinct.

Your answer will be graded for correctness, clarity, and *conciseness*.

(a) State the algorithm.

(b) Explain briefly why it takes $O(V)$ time.

4. **Data compression. (4 points)**

How many bits are in the Huffman encoding of the following message?
 (Do not count the bits to encode the table.)

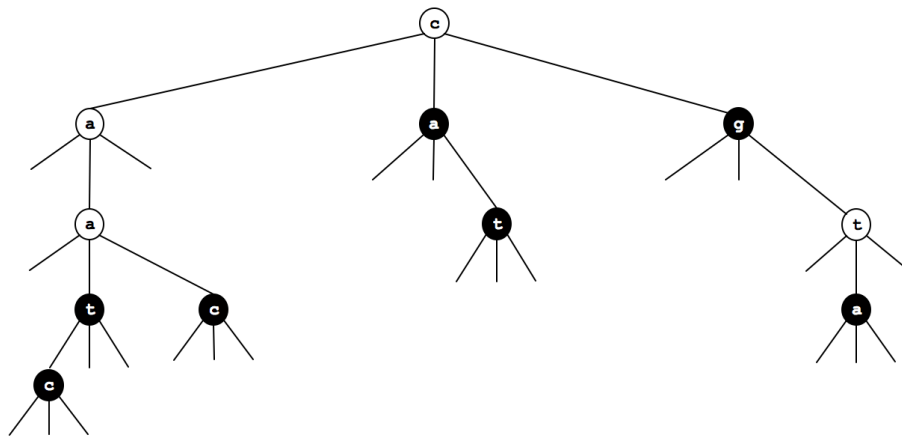
a b a a b a c a b a a b a c d a b a a b a c a b a a b a c d e

For reference, the frequency of each symbol is given in the table below.

a	b	c	d	e
16	8	4	2	1

5. **Ternary search tries. (6 points)**

Consider the following TST, where the black nodes correspond to strings in the TST.



(a) Which 7 strings (in alphabetical order) are in the TST?

(b) Draw the results of adding the following strings into the TST above:

cgt aaca tt

6. String searching. (8 points)

Complete the following DFA to match precisely those strings (over the two letter alphabet) that contain bababba as a substring. State 0 is the start state and state 7 is the accept state.

	0	1	2	3	4	5	6	7
a	0	2	0	4	0			7
b	1	1	3	1	5			7

7. Algorithm matching. (10 points)

Match up each application with an algorithm or data structure that we used to solve it in this course. Use each answer exactly once.

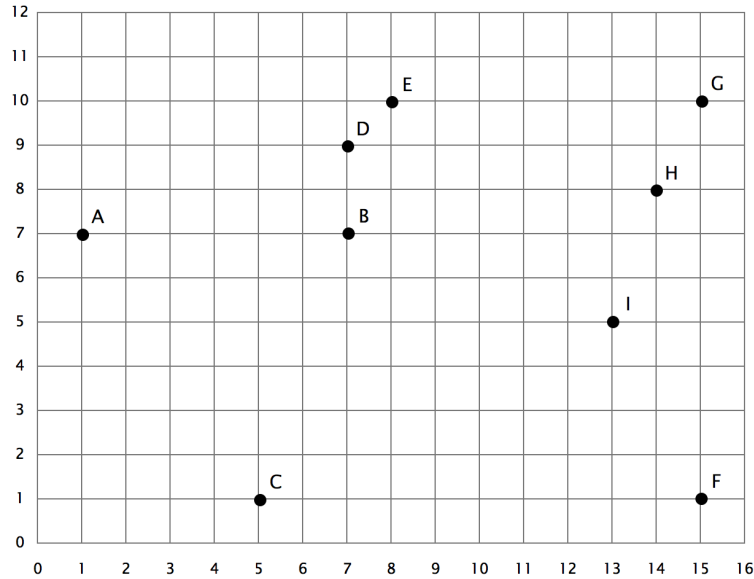
- | | |
|--|------------------------------|
| --- T9 texting in a cell phone | A. Trie |
| --- 1D range search | B. Hashing |
| --- 2D range search | C. 3-way radix quicksort |
| --- Document similarity | D. Binary search tree |
| --- Traveling salesperson problem | E. Kd tree |
| --- Sudoku solver | F. Depth-first search |
| --- Arbitrage detection in currency exchange rates | G. Breadth-first search |
| --- Mark-sweep garbage collector | H. Dijkstra's algorithm |
| --- Web crawler | I. Topological sort |
| --- Google maps | J. Bellman-Ford |
| --- PERT/CPM (Program Evaluation and Review Technique / Critical Path Method). | K. Enumerate permutations |
| --- Longest repeated substring | L. Enumerate base-R integers |

8. Regular expressions. (8 points)

Draw the NFA that results from the RE-to-NFA conversion algorithm described in lecture when applied to the regular expression $(a \mid (bc)^*) d^*$. Label the start state 0, the accept state 1, and remaining states in the order they are created by the RE-to-NFA algorithm.

9. **Convex hull. (8 points)**

Run the Graham scan algorithm to compute the convex hull of the 9 points below, using F as the base point, and continuing counterclockwise starting at G.



(a) List the points in the order that they are considered for insertion into the convex hull.

F G H I _ _ _ _ _ _ _ _ _ _ _ _ _ _ _

(b) Give the points that appear on the trial hull (after each of the remaining iterations).

1. F -> G -> H

2. F -> G -> H -> I

3.

4.

5.

6.

7.

10. 4-sum. (12 points)

Consider the 4-SUM problem: *Given N integers, do any 4 of them sum up to exactly 0?*

(a) Consider the following brute-force solution (we ignore integer overflow).

```
public static fourSum(int[] a) {
    int N = a.length;
    for (int i = 0; i < N; i++)
        for (int j = i+1; j < N; j++)
            for (int k = j+1; k < N; k++)
                for (int l = k+1; l < N; l++)
                    if (a[i] + a[j] + a[k] + a[l] == 0) return true;
    return false;
}
```

What is the order of growth of the worst-case running time? Circle the best answer.

N $N \log N$ N^2 N^3 N^4 2^N

(b) Design an algorithm for 4-SUM that runs in $O(N^2)$ time and uses $O(N^2)$ memory. Assume that you have access to a hashing-based symbol table that can `put()` and `get()` integer keys in constant time per operation.

11. **Reductions and shortest paths. (10 points)**

Given a digraph G , a distinguished vertex s , and nonnegative *vertex* weights, the *single-source vertex-weighted shortest path problem* is to find the shortest path from s to each vertex, where the length of the path is the sum of the weights of the vertices on the path.

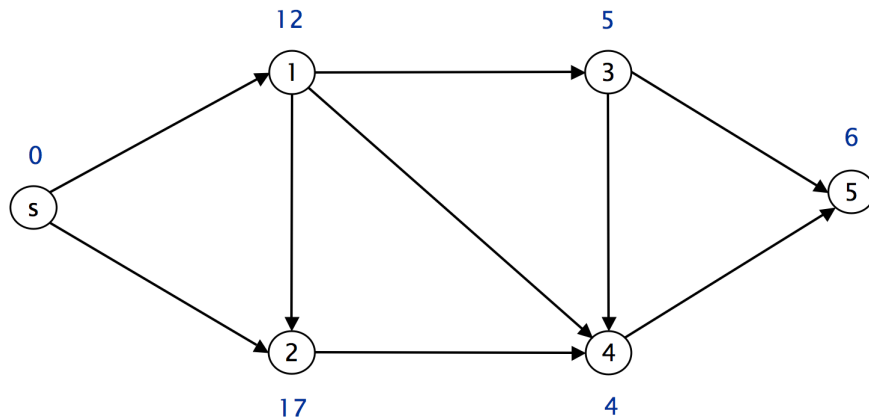


Figure 1: *The shortest path from s to 5 is $s - 1 - 4 - 5$ and has length 22.*

Give a linear-time reduction from the single-source *vertex-weighted* shortest path problem to the classic single-source *edge-weighted* shortest path problem. Demonstrate your reduction by drawing the corresponding digraph G' along with its edge weights.

12. **Suffix sorting. (8 points)**

Your Harvard friend is trying to sort the suffixes of a string `s` consisting of `N` ASCII characters, none of which is `'\0'`. The code calls `RadixQuicksort3way.sort()`, which sorts an array of `'\0'`-terminated strings.

```
// form the N suffixes, appending '\0' to the end of each string
String[] suffixes = new String[N];
for (int i = 0; i < N; i++) {
    suffixes[i] = s.substring(i, N) + "\0";
}

// sort the N strings
RadixQuicksort3way.sort(suffixes);
```

Unfortunately, when your friend uses this code for large `N`, it fails spectacularly, even for non-pathological inputs.

(a) Briefly explain the problem.

(b) Fix it so that it runs efficiently.