

Midterm 2 Written Exam

This test has 10 questions, weighted as indicated. The exam is closed book, except that you are allowed to use a one page cheatsheet (front and back). No calculators or other electronic devices are permitted. Give your answers and show your work in the space provided.

*Print your name, login ID, and precept number on this page (now), and **write out and sign the Honor Code pledge** before turning in this paper. Note: It is a violation of the Honor Code to discuss this midterm exam question with anyone until after everyone has taken the exam. You have 50 minutes to complete the test.*

This exam is preprocessed by computer: use a pen (or make sure your answers with a pencil are not faint) and do not write any answers outside of the designated frames.

“I pledge my honor that I have not violated the Honor Code during this examination.”

Name:

netID:

Room:

Pr: P01 P01A P01B P02 P02A P02B P02C P03 P03A P04 P05 P05A P05B P06 P06A

P01	T/Th 12:30pm	Donna Gabai	P03A	T/Th 2:30pm	Shaoqing (Victor) Yang
P01A	T/Th 12:30pm	Maia Ginsburg	P04	T/Th 7:30pm	Katie Edwards
P01B	T/Th 12:30pm	Andrea LaPaugh	P05	W/F 1:30pm	Doug Clark
P02	T/Th 1:30pm	Dan Leyzberg	P05A	W/F 1:30pm	Maia Ginsburg
P02A	T/Th 1:30pm	Stephen Cook	P05B	W/F 1:30pm	Ted Brundage
P02B	T/Th 1:30pm	Andrea LaPaugh	P06	W/F 2:30pm	Doug Clark
P02C	T/Th 1:30pm	Jordan Ash	P06A	W/F 2:30pm	Donna Gabai
P03	T/Th 2:30pm	Dan Leyzberg			

1. Number systems (7 points).

A. (3 points) Fill in the missing entries in the following table by converting the numbers between bases.

<i>hexadecimal</i>	<i>binary</i>	<i>decimal</i>
<input style="width: 100px; height: 30px; border: 1px solid black;" type="text"/>	10001010	<input style="width: 100px; height: 30px; border: 1px solid black;" type="text"/>
2D	00101101	<input style="width: 100px; height: 30px; border: 1px solid black;" type="text"/>
<input style="width: 100px; height: 30px; border: 1px solid black;" type="text"/>	<input style="width: 100px; height: 30px; border: 1px solid black;" type="text"/>	58
12	<input style="width: 100px; height: 30px; border: 1px solid black;" type="text"/>	18

B. (4 points) Assume that x is a two's complement binary integer whose absolute value is not large (so no overflow problems). At right are four Java expressions that use the \ll (shift left) and \sim (bitwise complement: flip each 0 to 1 and each 1 to 0 in the binary representation) operators. For example, $7 \ll 1$ is 14 and ~ 0 is -1. Match each expression to one of the mathematical functions at left (the one that it computes), by writing a , b , c , or d in each blank. You must use each letter exactly once and you must fill in all the blanks.

$a.$ $4x$	<input style="width: 40px; height: 20px; border: 1px solid black;" type="text"/> $(\sim x) + 1$
$b.$ $-x$	<input style="width: 40px; height: 20px; border: 1px solid black;" type="text"/> $(x \ll 1) + x$
$c.$ $3x$	<input style="width: 40px; height: 20px; border: 1px solid black;" type="text"/> $\sim x$
$d.$ $-x - 1$	<input style="width: 40px; height: 20px; border: 1px solid black;" type="text"/> $x \ll 2$

2. Programming Languages (5 points).

For each of the following statements, mark True if it applies, and False if it does not. **For each line, only fill in one answer.**

A. A memory leak is when...

	True	False
... a function is passed to another function.	<input type="radio"/>	<input type="radio"/>
... a Java program reuses an array variable.	<input type="radio"/>	<input type="radio"/>
... a Python program allocates a lot of memory for its own objects.	<input type="radio"/>	<input type="radio"/>
... a C/C++ program does not “free” memory that it allocated.	<input type="radio"/>	<input type="radio"/>
... a recursive function has no base case.	<input type="radio"/>	<input type="radio"/>

B. Compile-time type checking...

	True	False
... indicates the lack of a garbage collector.	<input type="radio"/>	<input type="radio"/>
... makes Java programming more difficult.	<input type="radio"/>	<input type="radio"/>
... cannot happen if you use generics.	<input type="radio"/>	<input type="radio"/>
... is not possible in Python.	<input type="radio"/>	<input type="radio"/>
... is a central feature of Matlab.	<input type="radio"/>	<input type="radio"/>

C. Functional programming languages...

	True	False
... typically allow compact code for powerful operations like map and reduce.	<input type="radio"/>	<input type="radio"/>
... generally do not support compile-time type checking.	<input type="radio"/>	<input type="radio"/>
... do not include Python.	<input type="radio"/>	<input type="radio"/>
... allow functions to take functions as arguments.	<input type="radio"/>	<input type="radio"/>
... do not support recursion.	<input type="radio"/>	<input type="radio"/>

3. REs (7 points). Let $L = \{ab, aab, aaaab, aabaab, aabaaab\}$. For each of the regular expressions below *check the only answer that applies*.

The possible options (and their shortnames) are:

- [NONE] Matches no strings in L.
- [SOME] Matches only some strings in L and some other strings.
- [MORE] Matches all strings in L and some other strings.
- [EXACT] Matches all strings in L and no other strings.

	NONE	SOME	MORE	EXACT
A. $(aa^*b)^*$	<input type="radio"/>	<input type="radio"/>	<input type="radio"/>	<input type="radio"/>
B. a^*b^*	<input type="radio"/>	<input type="radio"/>	<input type="radio"/>	<input type="radio"/>
C. $(a b)^*ab$	<input type="radio"/>	<input type="radio"/>	<input type="radio"/>	<input type="radio"/>
D. $a^*baba^*b^*$	<input type="radio"/>	<input type="radio"/>	<input type="radio"/>	<input type="radio"/>
E. $(ab) (a(a aba)(a aa)b)$	<input type="radio"/>	<input type="radio"/>	<input type="radio"/>	<input type="radio"/>
F. $a^*baa^*b^*$	<input type="radio"/>	<input type="radio"/>	<input type="radio"/>	<input type="radio"/>
G. $(a (aaa) (aaaa))b (aabaa(b ab))$	<input type="radio"/>	<input type="radio"/>	<input type="radio"/>	<input type="radio"/>

4. **Linked structures (7 points)**. Examine the following code and answer the questions below:

```
public class Node
{
    private String name;
    private Node next;
    public Node (String s, Node n)
    { name = s; next = n; }

    public static void mystery(Node first)
    {
        if (first == null) return; // base case
        mystery(first.next);
        System.out.println(first.name);
    }

    public static void main(String[] args)
    {
        Node a = new Node("Alice", null);
        Node b = new Node("Bob", a);
        Node e = new Node("Eve", a);
        Node t = a;
        t.next = e;
        t.next.next = b;
        b.next = null;
        mystery(t);
    }
}
```

A. (1 point) Check the value of the indicated node reference after completion of the *first three statements* (which create the nodes) in `main()`.

	a	b	e	null
a.next	<input type="radio"/>	<input type="radio"/>	<input type="radio"/>	<input type="radio"/>
b.next	<input type="radio"/>	<input type="radio"/>	<input type="radio"/>	<input type="radio"/>
e.next	<input type="radio"/>	<input type="radio"/>	<input type="radio"/>	<input type="radio"/>

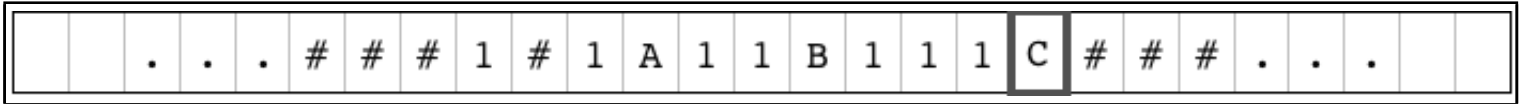
B. (3 points) Check the value of the indicated node reference after `main()` completes execution.

	a	b	e	null
a.next	<input type="radio"/>	<input type="radio"/>	<input type="radio"/>	<input type="radio"/>
b.next	<input type="radio"/>	<input type="radio"/>	<input type="radio"/>	<input type="radio"/>
e.next	<input type="radio"/>	<input type="radio"/>	<input type="radio"/>	<input type="radio"/>

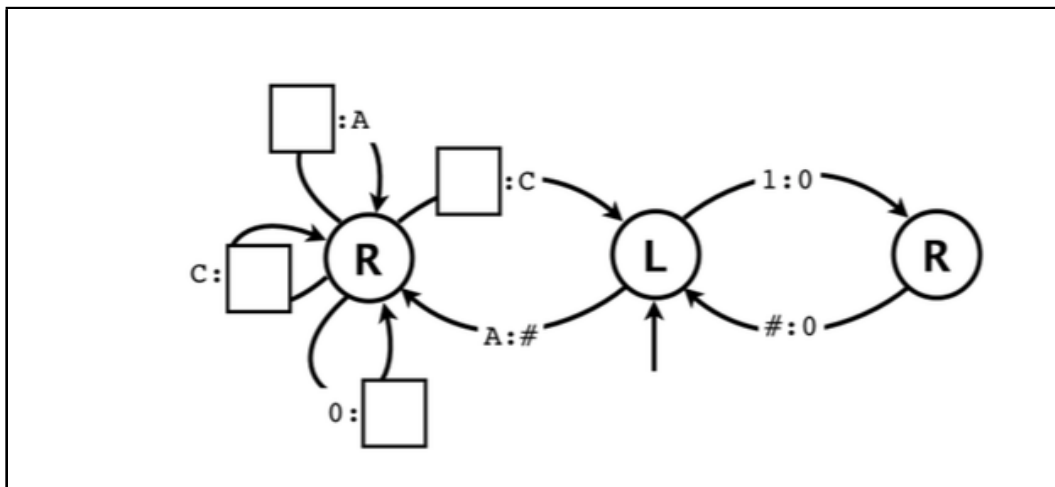
C. (3 points) Give the lines of output printed by the program.

5. Turing Machines (8 points).

The incomplete Turing machine below is supposed to write onto its tape the Fibonacci sequence 1, 1, 2, 3, 5, 8, 13, ..., but in unary notation: 1, 1, 11, 111, 11111, 11111111, 1111111111111. You will recall that each Fibonacci number is the sum of the previous two. This Turing machine uses the symbols A, B, and C to delineate the two most recently computed Fibonacci numbers. As usual, we omit transitions to the same state that do not change the symbol. Here is the tape before computing Fibonacci number 5, with the tape head positioned at the C:



Fill in exactly one symbol in each of the 4 empty squares below to complete the design of this Turing machine. To avoid worrying about initial conditions, you may assume that the initial contents of the tape and the position of the tape head are as given above and that the machine starts in the middle state, as indicated. Do not add new states or new transitions, and do not use tape symbols other than #, 0, 1, A, B, or C.



6. Sorting (7 points). Describe the order of growth of the running time of each specified algorithm below on a file of size n .

- | | n | n^2 | $n \log n$ |
|--|-----------------------|-----------------------|-----------------------|
| A. Insertion sort for a randomly ordered file | <input type="radio"/> | <input type="radio"/> | <input type="radio"/> |
| B. Mergesort for a randomly ordered file | <input type="radio"/> | <input type="radio"/> | <input type="radio"/> |
| C. Building a BST for a randomly ordered file | <input type="radio"/> | <input type="radio"/> | <input type="radio"/> |
| D. Insertion sort for a file that is in reverse order | <input type="radio"/> | <input type="radio"/> | <input type="radio"/> |
| E. Insertion sort for a file that is already in order | <input type="radio"/> | <input type="radio"/> | <input type="radio"/> |
| F. Mergesort for a file that is already in order | <input type="radio"/> | <input type="radio"/> | <input type="radio"/> |
| G. Building a BST for a file that is already in order | <input type="radio"/> | <input type="radio"/> | <input type="radio"/> |

TOY REFERENCE CARD

INSTRUCTION FORMATS

	
Format 1:	opcode d s t	(0-6, A-B)
Format 2:	opcode d addr	(7-9, C-F)

ARITHMETIC and LOGICAL operations

1: add	$R[d] \leftarrow R[s] + R[t]$
2: subtract	$R[d] \leftarrow R[s] - R[t]$
3: and	$R[d] \leftarrow R[s] \& R[t]$
4: xor	$R[d] \leftarrow R[s] \wedge R[t]$
5: shift left	$R[d] \leftarrow R[s] \ll R[t]$
6: shift right	$R[d] \leftarrow R[s] \gg R[t]$

TRANSFER between registers and memory

7: load address	$R[d] \leftarrow \text{addr}$
8: load	$R[d] \leftarrow \text{mem}[\text{addr}]$
9: store	$\text{mem}[\text{addr}] \leftarrow R[d]$
A: load indirect	$R[d] \leftarrow \text{mem}[R[t]]$
B: store indirect	$\text{mem}[R[t]] \leftarrow R[d]$

CONTROL

0: halt	halt
C: branch zero	if ($R[d] == 0$) pc \leftarrow addr
D: branch positive	if ($R[d] > 0$) pc \leftarrow addr
E: jump register	pc \leftarrow $R[d]$
F: jump and link	$R[d] \leftarrow$ pc; pc \leftarrow addr

Register 0 always reads 0.

Loads from mem[FF] come from stdin.

Stores to mem[FF] go to stdout.

7. TOY (8 points). Consider what happens when the following TOY program is executed by pressing RUN with the program counter set to 10:

```
10: 7201    R[2] <- 01
11: 7301    R[3] <- 01
12: 8115    R[1] <- Mem[15]
13: C117    if (R[1] == 0) PC <- 17
14: 2112    R[1] <- R[1] - R[2]
15: 1332    R[3] <- R[3] + R[2]
16: C013    PC <- 13
17: 0000    Halt
```

A. (2 points) What is the value of R[1] after the instruction at location 12 completes? Write your 4-digit hexadecimal answer in the blank below.

Answer:

B. (3 points) What is the value of R[3] after the first time the instruction at location 13 completes? Write your 4-digit hexadecimal answer in the blank below.

Answer:

C. (3 points) What is the value of R[3] when the program halts? Write your 4-digit hexadecimal answer in the blank below.

Answer:

8. Computability/Intractability (8 points). For each of the computational problems below, indicate its difficulty by marking the most appropriate choice among *True*, *False* or *Nobody Knows*.

	True	False	Nobody Knows
A. Every problem in NP is also in P.	<input type="radio"/>	<input type="radio"/>	<input type="radio"/>
B. There is a DFA that can recognize all binary palindromes (binary strings that read the same forwards and backwards).	<input type="radio"/>	<input type="radio"/>	<input type="radio"/>
C. There is a Turing machine that can decide whether the number of 1s on its input tape is prime.	<input type="radio"/>	<input type="radio"/>	<input type="radio"/>
D. The Halting Problem is NP-complete.	<input type="radio"/>	<input type="radio"/>	<input type="radio"/>
E. The Traveling Salesperson Problem is NP-complete.	<input type="radio"/>	<input type="radio"/>	<input type="radio"/>
F. There exists a deterministic Turing machine that can solve every problem in NP.	<input type="radio"/>	<input type="radio"/>	<input type="radio"/>
G. There is a DFA that can recognize the set of all binary strings that contain at least one million 0s and at least one million 1s.	<input type="radio"/>	<input type="radio"/>	<input type="radio"/>
H. If $P = NP$ there is a polynomial-time algorithm for factoring.	<input type="radio"/>	<input type="radio"/>	<input type="radio"/>

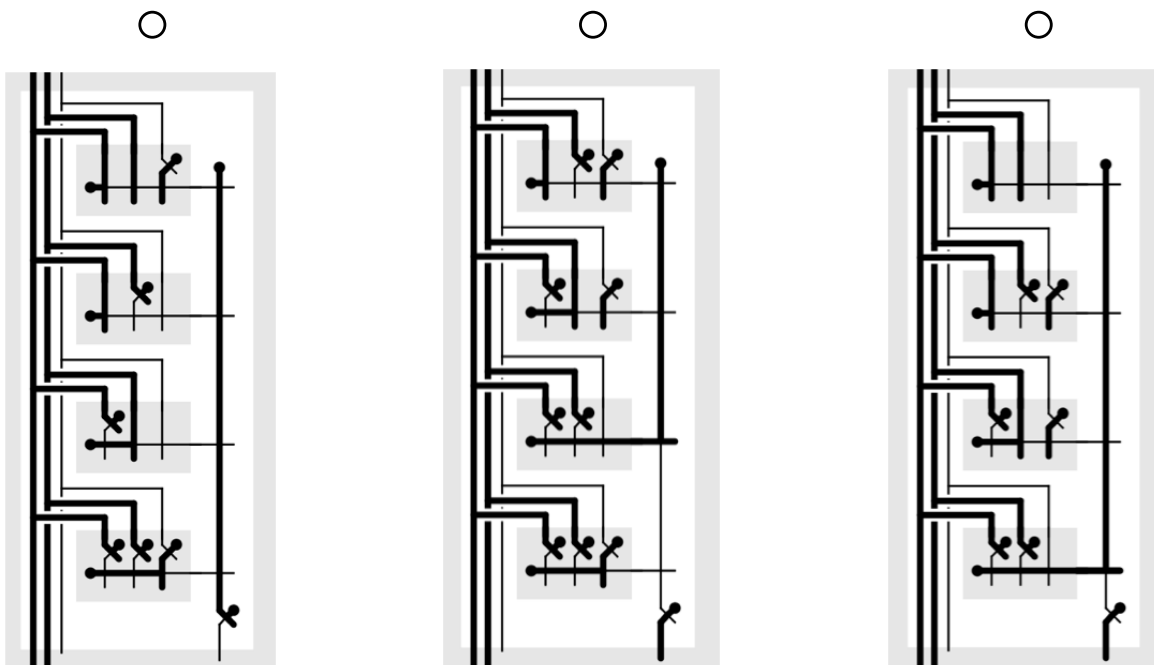
9. **Boolean algebra and combinational circuits (8 points).** The *even parity* function of N Boolean variables is 1 if and only if the number of variables with value 1 is even (including 0).

A. (3 points) Fill in the missing entries in this truth table for the 3-variable *even parity* function.

x	y	z	<i>even parity</i>
0	0	0	1
0	0	1	
0	1	0	
0	1	1	
1	0	0	
1	0	1	
1	1	0	
1	1	1	0

B. (3 points) In the box, write out the sum-of products form of *even parity* for 3 variables.

C. (2 points) Which of the circuits below is computing *even parity* for 3 variables with the inputs 1 1 0? In each circuit, assume that the inputs xyz are provided in that order to the three lines at the upper left and the output is the line at the bottom right. Check your answer in the circle above the correct circuit.



10. CPU (5 points). Identify each of the CPU components below as either a *combinational circuit* or a *sequential circuit*.

	Combinational Circuit	Sequential Circuit
A. ALU	<input type="radio"/>	<input type="radio"/>
B. MUX	<input type="radio"/>	<input type="radio"/>
C. Register	<input type="radio"/>	<input type="radio"/>
D. IR	<input type="radio"/>	<input type="radio"/>
E. Control	<input type="radio"/>	<input type="radio"/>
F. PC	<input type="radio"/>	<input type="radio"/>
G. Incrementer	<input type="radio"/>	<input type="radio"/>
H. Memory	<input type="radio"/>	<input type="radio"/>